

# Maths

Please help your children to continued to add and subtract amounts within 10.



Draw 2 more hats.




$$5 + 2 = \square$$

# Photos of the week



# English

## We are reading Adventure Stories





Dates for  
the Diary:

# Diary Dates

Thursday 17<sup>th</sup> November: class photos

Wednesday 23<sup>rd</sup> November: Year one is going for a walk around the school to support our geography topic 'Our local area.'

Please make sure children bring their coats to school

Tuesday 29<sup>th</sup> November: Art galleries at 3:00 o'clock